



ELITE MATHS
SIMPLIFY
ASSESSMENTS

YEAR 2020 v1

1

NUMERACY

Use 2B or HB pencil **ONLY**

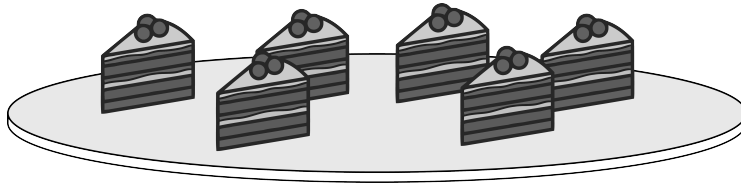


45_{min}

Time available for students to complete test: 45 minutes

YEAR 1 NUMERACY v1

1



How many cake slices are shown?

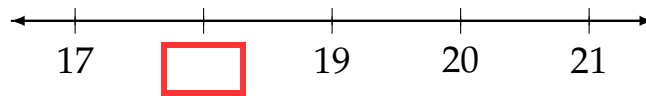
4

5

6

8

2



What is the missing number on this number line?

17

18

19

20

3



What is the angle made by the blades of the scissors?

20°


30°

90°

180°

YEAR 1 NUMERACY v1

19



What time does the clock show?

12:25

1:10

1:25

3:20

20 $25 + \boxed{?} = 38$

What is the missing number?

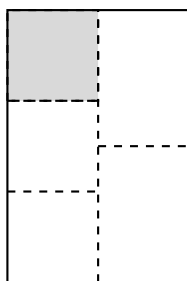
3

11

13

30

21



What fraction of this shape is shaded?

$\frac{1}{4}$

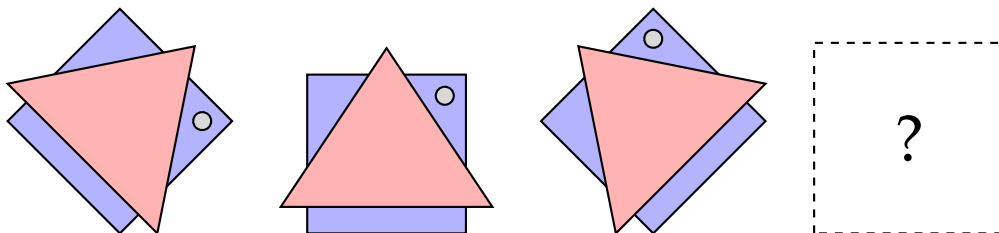
$\frac{1}{3}$

$\frac{1}{6}$

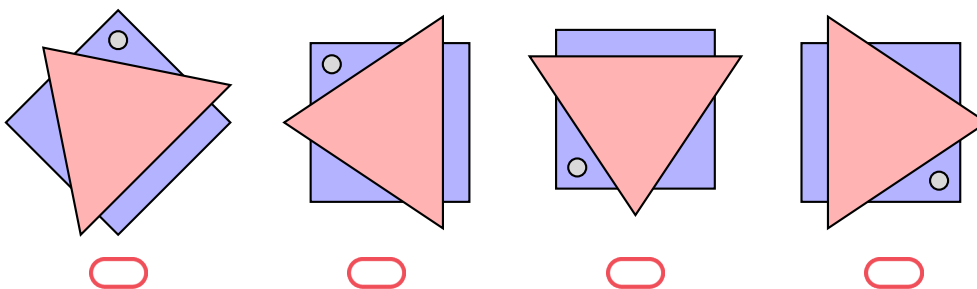
$\frac{1}{5}$

YEAR 1 NUMERACY v1

29

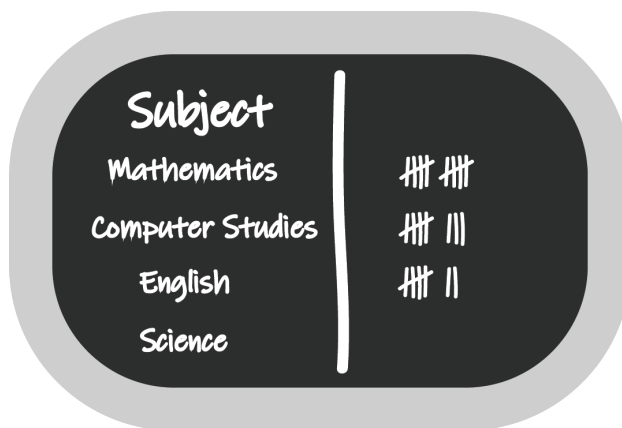


Which shape comes next?



30

A teacher asked 32 students what their favourite subject is. He made a tally chart using the students' answers. The teacher has not done the tally for Science yet.



How many students said that their favourite subject is Science?

students

STOP – END OF TEST


YEAR 1 NUMERACY v1 (ANSWERS)

1 6

2 18

3 90°

4 9




6 five

7 $17 + 4 = 21$ oranges

8 600 mL

9 5

10 \$5



13 120 cm

14 3

15 11 kg